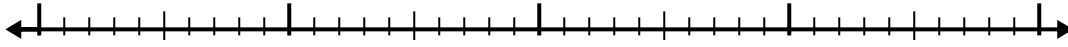


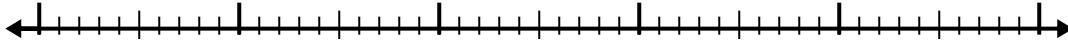


Use the number line to solve each problem.

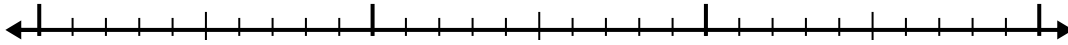
1) $6.1 + 2.6 =$



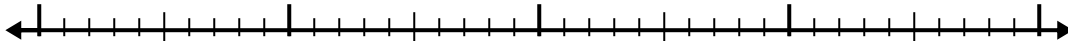
2) $5.9 + 3.5 =$




3) $6.2 + 1.3 =$



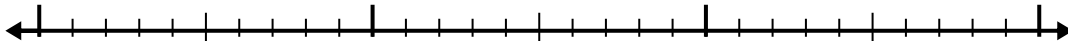
4) $6.5 + 1.2 =$



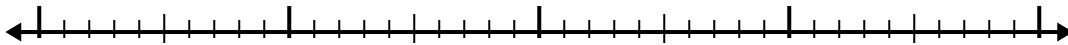
5) $1.2 + 2.3 =$




6) $5.8 + 1.6 =$



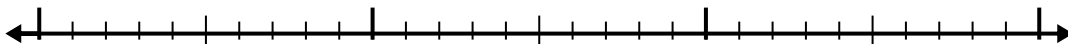
7) $2.4 + 1.7 =$



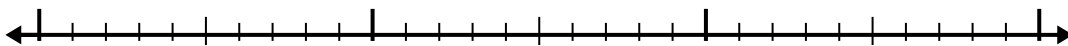
8) $4.1 + 3.9 =$



9) $5.2 + 1.1 =$



10) $3.7 + 1.1 =$



Answers

1. _____

2. _____

3. _____

4. _____

5. _____

6. _____

7. _____

8. _____

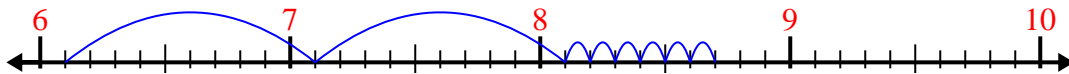
9. _____

10. _____

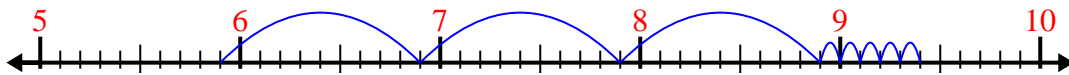


Use the number line to solve each problem.

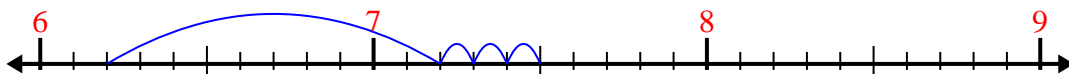
1) $6.1 + 2.6 =$



2) $5.9 + 3.5 =$



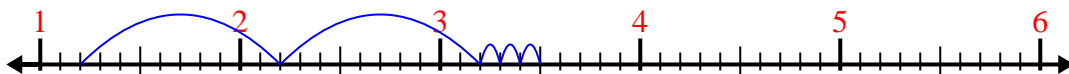
3) $6.2 + 1.3 =$




4) $6.5 + 1.2 =$



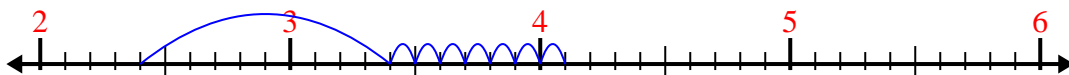
5) $1.2 + 2.3 =$



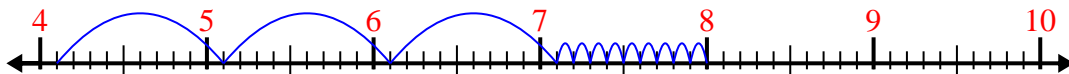
6) $5.8 + 1.6 =$



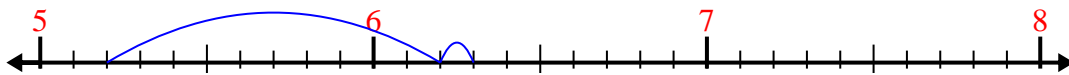
7) $2.4 + 1.7 =$



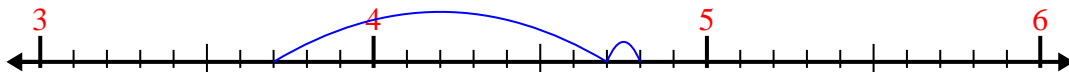
8) $4.1 + 3.9 =$



9) $5.2 + 1.1 =$



10) $3.7 + 1.1 =$



Answers

1. 8.7

2. 9.4

3. 7.5

4. 7.7

5. 3.5

6. 7.4

7. 4.1

8. 8.0

9. 6.3

10. 4.8